



## Convert the fraction to a decimal.

$$\frac{9}{10}$$

$$\frac{63}{100}$$

Converting from a fraction to a decimal is simple as long as you remember the place values.

The example above is nine-tenths. Lets look at how we'd write that as a decimal.

We do the same thing for the problem above only make sure we're in the hundredths place.

tens  
ones  
tenths  
hundredths

0.9  
tens  
ones  
tenths  
hundredths

0.63  
tens  
ones  
tenths  
hundredths

## Answers

 Ex. 0.12

Ex)  $\frac{12}{100} = 0.12$

1)  $\frac{8}{10} =$

2)  $\frac{5}{10} =$

3)  $\frac{51}{100} =$

4)  $\frac{4}{10} =$

5)  $\frac{8}{100} =$

6)  $\frac{9}{10} =$

7)  $\frac{6}{10} =$

8)  $\frac{3}{10} =$

9)  $\frac{59}{100} =$

10)  $\frac{1}{10} =$

11)  $\frac{5}{100} =$

12)  $\frac{9}{100} =$

13)  $\frac{58}{100} =$

14)  $\frac{30}{100} =$

15)  $\frac{3}{100} =$

16)  $\frac{49}{100} =$

17)  $\frac{1}{100} =$

18)  $\frac{17}{100} =$

19)  $\frac{6}{100} =$

20)  $\frac{2}{100} =$

1. \_\_\_\_\_

2. \_\_\_\_\_

3. \_\_\_\_\_

4. \_\_\_\_\_

5. \_\_\_\_\_

6. \_\_\_\_\_

7. \_\_\_\_\_

8. \_\_\_\_\_

9. \_\_\_\_\_

10. \_\_\_\_\_

11. \_\_\_\_\_

12. \_\_\_\_\_

13. \_\_\_\_\_

14. \_\_\_\_\_

15. \_\_\_\_\_

16. \_\_\_\_\_

17. \_\_\_\_\_

18. \_\_\_\_\_


19. \_\_\_\_\_

20. \_\_\_\_\_



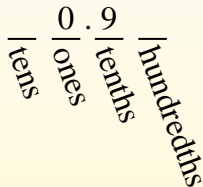
**Convert the fraction to a decimal.**

Converting from a fraction to a decimal is simple as long as you remember the place values.



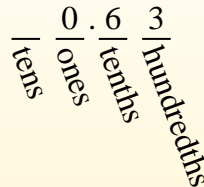
$$\frac{9}{10}$$

The example above is nine-tenths. Lets look at how we'd write that as a decimal.



$$\frac{63}{100}$$

We do the same thing for the problem above only make sure we're in the hundredths place.



**Answers**

- Ex. 0.12
- 1. 0.8
- 2. 0.5
- 3. 0.51
- 4. 0.4
- 5. 0.08
- 6. 0.9
- 7. 0.6
- 8. 0.3
- 9. 0.59
- 10. 0.1
- 11. 0.05
- 12. 0.09
- 13. 0.58
- 14. 0.30
- 15. 0.03
- 16. 0.49
- 17. 0.01
- 18. 0.17
- 19. 0.06
- 20. 0.02

Ex)  $\frac{12}{100} = 0.12$

1)  $\frac{8}{10} = 0.8$

2)  $\frac{5}{10} = 0.5$

3)  $\frac{51}{100} = 0.51$

4)  $\frac{4}{10} = 0.4$

5)  $\frac{8}{100} = 0.08$

6)  $\frac{9}{10} = 0.9$

7)  $\frac{6}{10} = 0.6$

8)  $\frac{3}{10} = 0.3$

9)  $\frac{59}{100} = 0.59$

10)  $\frac{1}{10} = 0.1$

11)  $\frac{5}{100} = 0.05$

12)  $\frac{9}{100} = 0.09$

13)  $\frac{58}{100} = 0.58$

14)  $\frac{30}{100} = 0.30$

15)  $\frac{3}{100} = 0.03$

16)  $\frac{49}{100} = 0.49$

17)  $\frac{1}{100} = 0.01$

18)  $\frac{17}{100} = 0.17$

19)  $\frac{6}{100} = 0.06$

20)  $\frac{2}{100} = 0.02$



## Convert the fraction to a decimal.

Converting from a fraction to a decimal is simple as long as you remember the place values.

tens  
ones  
tenths  
hundredths

$$\frac{9}{10}$$

The example above is nine-tenths. Lets look at how we'd write that as a decimal.

0.9  
tens ones tenths hundredths

$$\frac{63}{100}$$

We do the same thing for the problem above only make sure we're in the hundredths place.

0.63  
tens ones tenths hundredths

## Answers

 Ex. 0.04

1. \_\_\_\_\_

2. \_\_\_\_\_

3. \_\_\_\_\_

4. \_\_\_\_\_

5. \_\_\_\_\_

6. \_\_\_\_\_

7. \_\_\_\_\_

8. \_\_\_\_\_

9. \_\_\_\_\_

10. \_\_\_\_\_

11. \_\_\_\_\_

12. \_\_\_\_\_

13. \_\_\_\_\_

14. \_\_\_\_\_

15. \_\_\_\_\_

16. \_\_\_\_\_

17. \_\_\_\_\_

18. \_\_\_\_\_

19. \_\_\_\_\_

20. \_\_\_\_\_

Ex)  $\frac{4}{100} = 0.04$

1)  $\frac{9}{10} =$

2)  $\frac{3}{10} =$

3)  $\frac{1}{100} =$

4)  $\frac{2}{100} =$

5)  $\frac{44}{100} =$

6)  $\frac{87}{100} =$

7)  $\frac{80}{100} =$

8)  $\frac{38}{100} =$

9)  $\frac{6}{100} =$

10)  $\frac{55}{100} =$

11)  $\frac{7}{10} =$

12)  $\frac{8}{100} =$

13)  $\frac{2}{10} =$

14)  $\frac{1}{10} =$

15)  $\frac{5}{100} =$

16)  $\frac{6}{10} =$

17)  $\frac{7}{100} =$

18)  $\frac{97}{100} =$


19)  $\frac{70}{100} =$

20)  $\frac{5}{10} =$



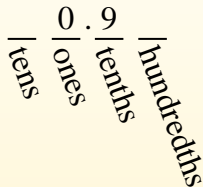
**Convert the fraction to a decimal.**

Converting from a fraction to a decimal is simple as long as you remember the place values.



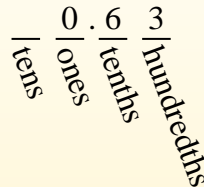
$$\frac{9}{10}$$

The example above is nine-tenths. Lets look at how we'd write that as a decimal.



$$\frac{63}{100}$$

We do the same thing for the problem above only make sure we're in the hundredths place.



**Answers**

- Ex. 0.04
- 1. 0.9
- 2. 0.3
- 3. 0.01
- 4. 0.02
- 5. 0.44
- 6. 0.87
- 7. 0.80
- 8. 0.38
- 9. 0.06
- 10. 0.55
- 11. 0.7
- 12. 0.08
- 13. 0.2
- 14. 0.1
- 15. 0.05
- 16. 0.6
- 17. 0.07
- 18. 0.97
- 19. 0.70
- 20. 0.5

Ex)  $\frac{4}{100} = 0.04$

1)  $\frac{9}{10} = 0.9$

2)  $\frac{3}{10} = 0.3$

3)  $\frac{1}{100} = 0.01$

4)  $\frac{2}{100} = 0.02$

5)  $\frac{44}{100} = 0.44$

6)  $\frac{87}{100} = 0.87$

7)  $\frac{80}{100} = 0.80$

8)  $\frac{38}{100} = 0.38$

9)  $\frac{6}{100} = 0.06$

10)  $\frac{55}{100} = 0.55$

11)  $\frac{7}{10} = 0.7$

12)  $\frac{8}{100} = 0.08$

13)  $\frac{2}{10} = 0.2$

14)  $\frac{1}{10} = 0.1$

15)  $\frac{5}{100} = 0.05$

16)  $\frac{6}{10} = 0.6$

17)  $\frac{7}{100} = 0.07$

18)  $\frac{97}{100} = 0.97$

19)  $\frac{70}{100} = 0.70$

20)  $\frac{5}{10} = 0.5$



## Convert the fraction to a decimal.

Converting from a fraction to a decimal is simple as long as you remember the place values.

tens  
ones  
tenths  
hundredths

$$\frac{9}{10}$$

The example above is nine-tenths. Lets look at how we'd write that as a decimal.

0.9  
tens ones tenths hundredths

$$\frac{63}{100}$$

We do the same thing for the problem above only make sure we're in the hundredths place.

0.63  
tens ones tenths hundredths

## Answers

 Ex. 0.1

1. \_\_\_\_\_

2. \_\_\_\_\_

3. \_\_\_\_\_

4. \_\_\_\_\_

5. \_\_\_\_\_

6. \_\_\_\_\_

7. \_\_\_\_\_

8. \_\_\_\_\_

9. \_\_\_\_\_

10. \_\_\_\_\_

11. \_\_\_\_\_

12. \_\_\_\_\_

13. \_\_\_\_\_

14. \_\_\_\_\_

15. \_\_\_\_\_

16. \_\_\_\_\_

17. \_\_\_\_\_

18. \_\_\_\_\_

19. \_\_\_\_\_

20. \_\_\_\_\_

Ex)  $\frac{1}{10} = 0.1$

1)  $\frac{5}{100} =$

2)  $\frac{2}{100} =$

3)  $\frac{62}{100} =$

4)  $\frac{7}{100} =$

5)  $\frac{6}{100} =$

6)  $\frac{69}{100} =$

7)  $\frac{8}{10} =$

8)  $\frac{81}{100} =$

9)  $\frac{8}{100} =$

10)  $\frac{5}{10} =$

11)  $\frac{2}{10} =$

12)  $\frac{36}{100} =$

13)  $\frac{4}{10} =$

14)  $\frac{9}{100} =$

15)  $\frac{1}{100} =$

16)  $\frac{76}{100} =$

17)  $\frac{59}{100} =$

18)  $\frac{7}{10} =$


19)  $\frac{99}{100} =$

20)  $\frac{6}{10} =$



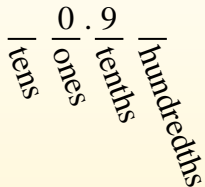
**Convert the fraction to a decimal.**

Converting from a fraction to a decimal is simple as long as you remember the place values.



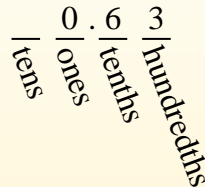
$$\frac{9}{10}$$

The example above is nine-tenths. Lets look at how we'd write that as a decimal.



$$\frac{63}{100}$$

We do the same thing for the problem above only make sure we're in the hundredths place.



**Answers**

Ex. 0.1

1. 0.05

2. 0.02

3. 0.62

4. 0.07

5. 0.06

6. 0.69

7. 0.8

8. 0.81

9. 0.08

10. 0.5

11. 0.2

12. 0.36

13. 0.4

14. 0.09

15. 0.01

16. 0.76

17. 0.59

18. 0.7

19. 0.99

20. 0.6

Ex)  $\frac{1}{10} = 0.1$

1)  $\frac{5}{100} = 0.05$

2)  $\frac{2}{100} = 0.02$

3)  $\frac{62}{100} = 0.62$

4)  $\frac{7}{100} = 0.07$

5)  $\frac{6}{100} = 0.06$

6)  $\frac{69}{100} = 0.69$

7)  $\frac{8}{10} = 0.8$

8)  $\frac{81}{100} = 0.81$

9)  $\frac{8}{100} = 0.08$

10)  $\frac{5}{10} = 0.5$

11)  $\frac{2}{10} = 0.2$

12)  $\frac{36}{100} = 0.36$

13)  $\frac{4}{10} = 0.4$

14)  $\frac{9}{100} = 0.09$

15)  $\frac{1}{100} = 0.01$

16)  $\frac{76}{100} = 0.76$

17)  $\frac{59}{100} = 0.59$

18)  $\frac{7}{10} = 0.7$

19)  $\frac{99}{100} = 0.99$


20)  $\frac{6}{10} = 0.6$



**Convert the fraction to a decimal.**

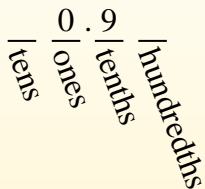
**Answers**

Converting from a fraction to a decimal is simple as long as you remember the place values.



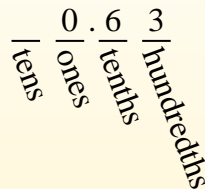
$$\frac{9}{10}$$

The example above is nine-tenths. Lets look at how we'd write that as a decimal.



$$\frac{63}{100}$$

We do the same thing for the problem above only make sure we're in the hundredths place.



Ex. 0.07

1. \_\_\_\_\_

2. \_\_\_\_\_

3. \_\_\_\_\_

4. \_\_\_\_\_

5. \_\_\_\_\_

6. \_\_\_\_\_

7. \_\_\_\_\_

8. \_\_\_\_\_

9. \_\_\_\_\_

10. \_\_\_\_\_

11. \_\_\_\_\_

12. \_\_\_\_\_

13. \_\_\_\_\_

14. \_\_\_\_\_

15. \_\_\_\_\_

16. \_\_\_\_\_

17. \_\_\_\_\_

18. \_\_\_\_\_

19. \_\_\_\_\_

20. \_\_\_\_\_

Ex)  $\frac{7}{100} = 0.07$

1)  $\frac{89}{100} =$

2)  $\frac{62}{100} =$

3)  $\frac{44}{100} =$

4)  $\frac{9}{10} =$

5)  $\frac{4}{10} =$

6)  $\frac{12}{100} =$

7)  $\frac{1}{100} =$

8)  $\frac{5}{10} =$

9)  $\frac{28}{100} =$

10)  $\frac{8}{100} =$

11)  $\frac{2}{10} =$

12)  $\frac{72}{100} =$

13)  $\frac{6}{10} =$

14)  $\frac{3}{100} =$

15)  $\frac{7}{10} =$

16)  $\frac{5}{100} =$

17)  $\frac{11}{100} =$

18)  $\frac{6}{100} =$


19)  $\frac{4}{100} =$

20)  $\frac{3}{10} =$



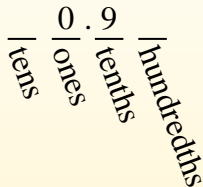
**Convert the fraction to a decimal.**

Converting from a fraction to a decimal is simple as long as you remember the place values.



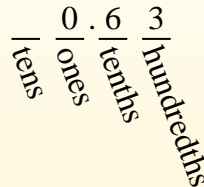
$$\frac{9}{10}$$

The example above is nine-tenths. Lets look at how we'd write that as a decimal.



$$\frac{63}{100}$$

We do the same thing for the problem above only make sure we're in the hundredths place.



**Answers**

Ex. 0.07

1. 0.89

2. 0.62

3. 0.44

4. 0.9

5. 0.4

6. 0.12

7. 0.01

8. 0.5

9. 0.28

10. 0.08

11. 0.2

12. 0.72

13. 0.6

14. 0.03

15. 0.7

16. 0.05

17. 0.11

18. 0.06

19. 0.04

20. 0.3

Ex)  $\frac{7}{100} = 0.07$

1)  $\frac{89}{100} = 0.89$

2)  $\frac{62}{100} = 0.62$

3)  $\frac{44}{100} = 0.44$

4)  $\frac{9}{10} = 0.9$

5)  $\frac{4}{10} = 0.4$

6)  $\frac{12}{100} = 0.12$

7)  $\frac{1}{100} = 0.01$

8)  $\frac{5}{10} = 0.5$

9)  $\frac{28}{100} = 0.28$

10)  $\frac{8}{100} = 0.08$

11)  $\frac{2}{10} = 0.2$

12)  $\frac{72}{100} = 0.72$

13)  $\frac{6}{10} = 0.6$

14)  $\frac{3}{100} = 0.03$

15)  $\frac{7}{10} = 0.7$

16)  $\frac{5}{100} = 0.05$

17)  $\frac{11}{100} = 0.11$

18)  $\frac{6}{100} = 0.06$

19)  $\frac{4}{100} = 0.04$

20)  $\frac{3}{10} = 0.3$





## Convert the fraction to a decimal.

Converting from a fraction to a decimal is simple as long as you remember the place values.

tens  
ones  
tenths  
hundredths

$$\frac{9}{10}$$

The example above is nine-tenths. Lets look at how we'd write that as a decimal.

0.9  
tens ones tenths hundredths

$$\frac{63}{100}$$

We do the same thing for the problem above only make sure we're in the hundredths place.

0.63  
tens ones tenths hundredths

## Answers

 Ex. 0.63

1. \_\_\_\_\_

2. \_\_\_\_\_

3. \_\_\_\_\_

4. \_\_\_\_\_

5. \_\_\_\_\_

6. \_\_\_\_\_

7. \_\_\_\_\_

8. \_\_\_\_\_

9. \_\_\_\_\_

10. \_\_\_\_\_

11. \_\_\_\_\_

12. \_\_\_\_\_

13. \_\_\_\_\_

14. \_\_\_\_\_

15. \_\_\_\_\_

16. \_\_\_\_\_

17. \_\_\_\_\_

18. \_\_\_\_\_

19. \_\_\_\_\_

20. \_\_\_\_\_

Ex)  $\frac{63}{100} = 0.63$

1)  $\frac{9}{10} =$

2)  $\frac{3}{100} =$

3)  $\frac{5}{10} =$

4)  $\frac{7}{10} =$

5)  $\frac{2}{10} =$

6)  $\frac{1}{10} =$

7)  $\frac{4}{100} =$

8)  $\frac{4}{10} =$

9)  $\frac{5}{100} =$

10)  $\frac{8}{100} =$

11)  $\frac{3}{10} =$

12)  $\frac{9}{100} =$

13)  $\frac{42}{100} =$

14)  $\frac{91}{100} =$

15)  $\frac{58}{100} =$

16)  $\frac{6}{100} =$

17)  $\frac{83}{100} =$

18)  $\frac{26}{100} =$


19)  $\frac{74}{100} =$

20)  $\frac{1}{100} =$



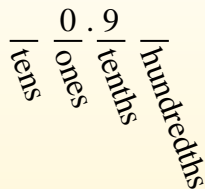
**Convert the fraction to a decimal.**

Converting from a fraction to a decimal is simple as long as you remember the place values.



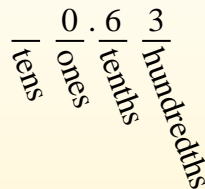
$$\frac{9}{10}$$

The example above is nine-tenths. Lets look at how we'd write that as a decimal.



$$\frac{63}{100}$$

We do the same thing for the problem above only make sure we're in the hundredths place.



**Answers**

Ex. 0.63

1. 0.9

2. 0.03

3. 0.5

4. 0.7

5. 0.2

6. 0.1

7. 0.04

8. 0.4

9. 0.05

10. 0.08

11. 0.3

12. 0.09

13. 0.42

14. 0.91

15. 0.58

16. 0.06

17. 0.83

18. 0.26

19. 0.74

20. 0.01

Ex)  $\frac{63}{100} = 0.63$

1)  $\frac{9}{10} = 0.9$

2)  $\frac{3}{100} = 0.03$

3)  $\frac{5}{10} = 0.5$

4)  $\frac{7}{10} = 0.7$

5)  $\frac{2}{10} = 0.2$

6)  $\frac{1}{10} = 0.1$

7)  $\frac{4}{100} = 0.04$

8)  $\frac{4}{10} = 0.4$

9)  $\frac{5}{100} = 0.05$

10)  $\frac{8}{100} = 0.08$

11)  $\frac{3}{10} = 0.3$

12)  $\frac{9}{100} = 0.09$

13)  $\frac{42}{100} = 0.42$

14)  $\frac{91}{100} = 0.91$

15)  $\frac{58}{100} = 0.58$

16)  $\frac{6}{100} = 0.06$

17)  $\frac{83}{100} = 0.83$

18)  $\frac{26}{100} = 0.26$

19)  $\frac{74}{100} = 0.74$

20)  $\frac{1}{100} = 0.01$



## Convert the fraction to a decimal.

Converting from a fraction to a decimal is simple as long as you remember the place values.

tens  
ones  
tenths  
hundredths

$$\frac{9}{10}$$

The example above is nine-tenths. Lets look at how we'd write that as a decimal.

0.9  
tens  
ones  
tenths  
hundredths

$$\frac{63}{100}$$

We do the same thing for the problem above only make sure we're in the hundredths place.

0.63  
tens  
ones  
tenths  
hundredths

## Answers

 Ex. 0.8

1. \_\_\_\_\_

2. \_\_\_\_\_

3. \_\_\_\_\_

4. \_\_\_\_\_

5. \_\_\_\_\_

6. \_\_\_\_\_

7. \_\_\_\_\_

8. \_\_\_\_\_

9. \_\_\_\_\_

10. \_\_\_\_\_

11. \_\_\_\_\_

12. \_\_\_\_\_

13. \_\_\_\_\_

14. \_\_\_\_\_

15. \_\_\_\_\_

16. \_\_\_\_\_

17. \_\_\_\_\_

18. \_\_\_\_\_

19. \_\_\_\_\_

20. \_\_\_\_\_

Ex)  $\frac{8}{10} = 0.8$

1)  $\frac{16}{100} =$

2)  $\frac{6}{100} =$

3)  $\frac{7}{100} =$

4)  $\frac{3}{10} =$

5)  $\frac{7}{10} =$

6)  $\frac{2}{10} =$

7)  $\frac{9}{100} =$

8)  $\frac{3}{100} =$

9)  $\frac{97}{100} =$

10)  $\frac{8}{100} =$

11)  $\frac{21}{100} =$

12)  $\frac{4}{10} =$

13)  $\frac{15}{100} =$

14)  $\frac{42}{100} =$

15)  $\frac{53}{100} =$

16)  $\frac{1}{100} =$

17)  $\frac{1}{10} =$

18)  $\frac{4}{100} =$


19)  $\frac{5}{10} =$

20)  $\frac{46}{100} =$



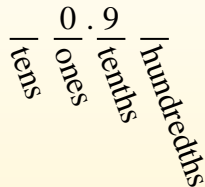
**Convert the fraction to a decimal.**

Converting from a fraction to a decimal is simple as long as you remember the place values.



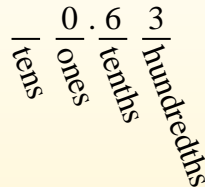
$$\frac{9}{10}$$

The example above is nine-tenths. Lets look at how we'd write that as a decimal.



$$\frac{63}{100}$$

We do the same thing for the problem above only make sure we're in the hundredths place.



**Answers**

Ex)  $\frac{8}{10} = 0.8$

1)  $\frac{16}{100} = 0.16$

2)  $\frac{6}{100} = 0.06$

3)  $\frac{7}{100} = 0.07$

4)  $\frac{3}{10} = 0.3$

5)  $\frac{7}{10} = 0.7$

6)  $\frac{2}{10} = 0.2$

7)  $\frac{9}{100} = 0.09$

8)  $\frac{3}{100} = 0.03$

9)  $\frac{97}{100} = 0.97$

10)  $\frac{8}{100} = 0.08$

11)  $\frac{21}{100} = 0.21$

12)  $\frac{4}{10} = 0.4$

13)  $\frac{15}{100} = 0.15$

14)  $\frac{42}{100} = 0.42$

15)  $\frac{53}{100} = 0.53$

16)  $\frac{1}{100} = 0.01$

17)  $\frac{1}{10} = 0.1$

18)  $\frac{4}{100} = 0.04$

19)  $\frac{5}{10} = 0.5$

20)  $\frac{46}{100} = 0.46$

Ex. 0.8

1. 0.16

2. 0.06

3. 0.07

4. 0.3

5. 0.7

6. 0.2

7. 0.09

8. 0.03

9. 0.97

10. 0.08

11. 0.21

12. 0.4

13. 0.15

14. 0.42

15. 0.53

16. 0.01

17. 0.1

18. 0.04

19. 0.5

20. 0.46



## Convert the fraction to a decimal.

Converting from a fraction to a decimal is simple as long as you remember the place values.

tens  
ones  
tenths  
hundredths

$$\frac{9}{10}$$

The example above is nine-tenths. Lets look at how we'd write that as a decimal.

0.9  
tens ones tenths hundredths

$$\frac{63}{100}$$

We do the same thing for the problem above only make sure we're in the hundredths place.

0.63  
tens ones tenths hundredths

## Answers

 Ex. 0.6

1. \_\_\_\_\_

2. \_\_\_\_\_

3. \_\_\_\_\_

4. \_\_\_\_\_

5. \_\_\_\_\_

6. \_\_\_\_\_

7. \_\_\_\_\_

8. \_\_\_\_\_

9. \_\_\_\_\_

10. \_\_\_\_\_

11. \_\_\_\_\_

12. \_\_\_\_\_

13. \_\_\_\_\_

14. \_\_\_\_\_

15. \_\_\_\_\_

16. \_\_\_\_\_

17. \_\_\_\_\_

18. \_\_\_\_\_

19. \_\_\_\_\_

20. \_\_\_\_\_

Ex)  $\frac{6}{10} = 0.6$

1)  $\frac{70}{100} =$

2)  $\frac{18}{100} =$

3)  $\frac{4}{10} =$

4)  $\frac{82}{100} =$

5)  $\frac{7}{10} =$

6)  $\frac{8}{100} =$

7)  $\frac{2}{100} =$

8)  $\frac{7}{100} =$

9)  $\frac{2}{10} =$

10)  $\frac{45}{100} =$

11)  $\frac{50}{100} =$

12)  $\frac{6}{100} =$

13)  $\frac{3}{10} =$

14)  $\frac{1}{10} =$

15)  $\frac{80}{100} =$

16)  $\frac{5}{100} =$

17)  $\frac{60}{100} =$

18)  $\frac{4}{100} =$


19)  $\frac{9}{10} =$

20)  $\frac{3}{100} =$



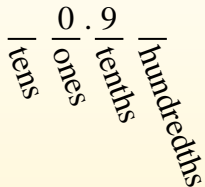
**Convert the fraction to a decimal.**

Converting from a fraction to a decimal is simple as long as you remember the place values.



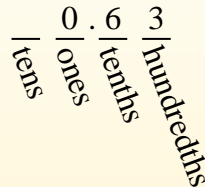
$$\frac{9}{10}$$

The example above is nine-tenths. Lets look at how we'd write that as a decimal.



$$\frac{63}{100}$$

We do the same thing for the problem above only make sure we're in the hundredths place.



**Answers**

Ex)  $\frac{6}{10} = 0.6$

1)  $\frac{70}{100} = 0.70$

2)  $\frac{18}{100} = 0.18$

3)  $\frac{4}{10} = 0.4$

4)  $\frac{82}{100} = 0.82$

5)  $\frac{7}{10} = 0.7$

6)  $\frac{8}{100} = 0.08$

7)  $\frac{2}{100} = 0.02$

8)  $\frac{7}{100} = 0.07$

9)  $\frac{2}{10} = 0.2$

10)  $\frac{45}{100} = 0.45$

11)  $\frac{50}{100} = 0.50$

12)  $\frac{6}{100} = 0.06$

13)  $\frac{3}{10} = 0.3$

14)  $\frac{1}{10} = 0.1$

15)  $\frac{80}{100} = 0.80$

16)  $\frac{5}{100} = 0.05$

17)  $\frac{60}{100} = 0.60$

18)  $\frac{4}{100} = 0.04$

19)  $\frac{9}{10} = 0.9$

20)  $\frac{3}{100} = 0.03$


- Ex. 0.6
- 1. 0.70
- 2. 0.18
- 3. 0.4
- 4. 0.82
- 5. 0.7
- 6. 0.08
- 7. 0.02
- 8. 0.07
- 9. 0.2
- 10. 0.45
- 11. 0.50
- 12. 0.06
- 13. 0.3
- 14. 0.1
- 15. 0.80
- 16. 0.05
- 17. 0.60
- 18. 0.04
- 19. 0.9
- 20. 0.03



**Convert the fraction to a decimal.**

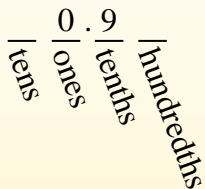
**Answers**

Converting from a fraction to a decimal is simple as long as you remember the place values.



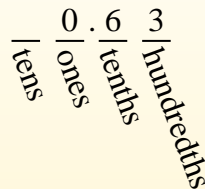
$\frac{9}{10}$

The example above is nine-tenths. Lets look at how we'd write that as a decimal.



$\frac{63}{100}$

We do the same thing for the problem above only make sure we're in the hundredths place.



Ex. 0.05

1. \_\_\_\_\_

2. \_\_\_\_\_

3. \_\_\_\_\_

4. \_\_\_\_\_

5. \_\_\_\_\_

6. \_\_\_\_\_

7. \_\_\_\_\_

8. \_\_\_\_\_

9. \_\_\_\_\_

10. \_\_\_\_\_

11. \_\_\_\_\_

12. \_\_\_\_\_

13. \_\_\_\_\_

14. \_\_\_\_\_

15. \_\_\_\_\_

16. \_\_\_\_\_

17. \_\_\_\_\_

18. \_\_\_\_\_

19. \_\_\_\_\_

20. \_\_\_\_\_

Ex)  $\frac{5}{100} = 0.05$

1)  $\frac{6}{10} =$

2)  $\frac{37}{100} =$

3)  $\frac{2}{100} =$

4)  $\frac{5}{10} =$

5)  $\frac{3}{10} =$

6)  $\frac{3}{100} =$

7)  $\frac{9}{10} =$

8)  $\frac{98}{100} =$

9)  $\frac{91}{100} =$

10)  $\frac{7}{100} =$

11)  $\frac{6}{100} =$

12)  $\frac{1}{10} =$

13)  $\frac{9}{100} =$

14)  $\frac{4}{100} =$

15)  $\frac{4}{10} =$

16)  $\frac{43}{100} =$

17)  $\frac{8}{10} =$

18)  $\frac{20}{100} =$


19)  $\frac{21}{100} =$

20)  $\frac{13}{100} =$



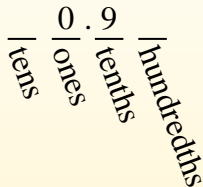
**Convert the fraction to a decimal.**

Converting from a fraction to a decimal is simple as long as you remember the place values.



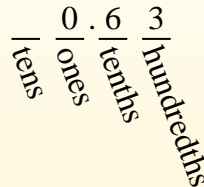
$$\frac{9}{10}$$

The example above is nine-tenths. Lets look at how we'd write that as a decimal.



$$\frac{63}{100}$$

We do the same thing for the problem above only make sure we're in the hundredths place.



**Answers**

- Ex. 0.05
- 1. 0.6
- 2. 0.37
- 3. 0.02
- 4. 0.5
- 5. 0.3
- 6. 0.03
- 7. 0.9
- 8. 0.98
- 9. 0.91
- 10. 0.07
- 11. 0.06
- 12. 0.1
- 13. 0.09
- 14. 0.04
- 15. 0.4
- 16. 0.43
- 17. 0.8
- 18. 0.20
- 19. 0.21
- 20. 0.13

Ex)  $\frac{5}{100} = 0.05$

1)  $\frac{6}{10} = 0.6$

2)  $\frac{37}{100} = 0.37$

3)  $\frac{2}{100} = 0.02$

4)  $\frac{5}{10} = 0.5$

5)  $\frac{3}{10} = 0.3$

6)  $\frac{3}{100} = 0.03$

7)  $\frac{9}{10} = 0.9$

8)  $\frac{98}{100} = 0.98$

9)  $\frac{91}{100} = 0.91$

10)  $\frac{7}{100} = 0.07$

11)  $\frac{6}{100} = 0.06$

12)  $\frac{1}{10} = 0.1$

13)  $\frac{9}{100} = 0.09$

14)  $\frac{4}{100} = 0.04$

15)  $\frac{4}{10} = 0.4$

16)  $\frac{43}{100} = 0.43$

17)  $\frac{8}{10} = 0.8$

18)  $\frac{20}{100} = 0.20$

19)  $\frac{21}{100} = 0.21$

20)  $\frac{13}{100} = 0.13$





Convert the fraction to a decimal.

Answers

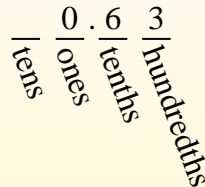
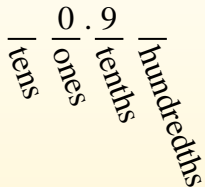

$$\frac{9}{10}$$

$$\frac{63}{100}$$

Converting from a fraction to a decimal is simple as long as you remember the place values.

The example above is nine-tenths. Lets look at how we'd write that as a decimal.

We do the same thing for the problem above only make sure we're in the hundredths place.



- Ex. 0.8
1. \_\_\_\_\_
2. \_\_\_\_\_
3. \_\_\_\_\_
4. \_\_\_\_\_
5. \_\_\_\_\_
6. \_\_\_\_\_
7. \_\_\_\_\_
8. \_\_\_\_\_
9. \_\_\_\_\_
10. \_\_\_\_\_
11. \_\_\_\_\_
12. \_\_\_\_\_
13. \_\_\_\_\_
14. \_\_\_\_\_
15. \_\_\_\_\_
16. \_\_\_\_\_
17. \_\_\_\_\_
18. \_\_\_\_\_
19. \_\_\_\_\_
20. \_\_\_\_\_

Ex)  $\frac{8}{10} = 0.8$

1)  $\frac{7}{10} =$

2)  $\frac{5}{100} =$

3)  $\frac{2}{10} =$

4)  $\frac{80}{100} =$

5)  $\frac{3}{10} =$

6)  $\frac{7}{100} =$

7)  $\frac{9}{100} =$

8)  $\frac{1}{100} =$

9)  $\frac{8}{100} =$

10)  $\frac{34}{100} =$

11)  $\frac{9}{10} =$

12)  $\frac{81}{100} =$

13)  $\frac{4}{10} =$

14)  $\frac{13}{100} =$

15)  $\frac{5}{10} =$

16)  $\frac{6}{100} =$

17)  $\frac{2}{100} =$

18)  $\frac{85}{100} =$


19)  $\frac{49}{100} =$

20)  $\frac{25}{100} =$



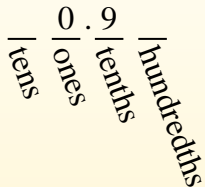
**Convert the fraction to a decimal.**

Converting from a fraction to a decimal is simple as long as you remember the place values.



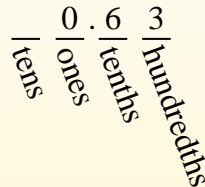
$$\frac{9}{10}$$

The example above is nine-tenths. Lets look at how we'd write that as a decimal.



$$\frac{63}{100}$$

We do the same thing for the problem above only make sure we're in the hundredths place.



**Answers**

Ex)  $\frac{8}{10} = 0.8$

1)  $\frac{7}{10} = 0.7$

2)  $\frac{5}{100} = 0.05$

3)  $\frac{2}{10} = 0.2$

4)  $\frac{80}{100} = 0.80$

5)  $\frac{3}{10} = 0.3$

6)  $\frac{7}{100} = 0.07$

7)  $\frac{9}{100} = 0.09$

8)  $\frac{1}{100} = 0.01$

9)  $\frac{8}{100} = 0.08$

10)  $\frac{34}{100} = 0.34$

11)  $\frac{9}{10} = 0.9$

12)  $\frac{81}{100} = 0.81$

13)  $\frac{4}{10} = 0.4$

14)  $\frac{13}{100} = 0.13$

15)  $\frac{5}{10} = 0.5$

16)  $\frac{6}{100} = 0.06$

17)  $\frac{2}{100} = 0.02$

18)  $\frac{85}{100} = 0.85$

19)  $\frac{49}{100} = 0.49$

20)  $\frac{25}{100} = 0.25$

Ex. 0.8

1. 0.7

2. 0.05

3. 0.2

4. 0.80

5. 0.3

6. 0.07

7. 0.09

8. 0.01

9. 0.08

10. 0.34

11. 0.9

12. 0.81

13. 0.4

14. 0.13

15. 0.5

16. 0.06

17. 0.02

18. 0.85

19. 0.49

20. 0.25



## Convert the fraction to a decimal.

Converting from a fraction to a decimal is simple as long as you remember the place values.

tens  
ones  
tenths  
hundredths

$$\frac{9}{10}$$

The example above is nine-tenths. Lets look at how we'd write that as a decimal.

0.9  
tens ones tenths hundredths

$$\frac{63}{100}$$

We do the same thing for the problem above only make sure we're in the hundredths place.

0.63  
tens ones tenths hundredths

## Answers

 Ex. 0.5

1. \_\_\_\_\_

2. \_\_\_\_\_

3. \_\_\_\_\_

4. \_\_\_\_\_

5. \_\_\_\_\_

6. \_\_\_\_\_

7. \_\_\_\_\_

8. \_\_\_\_\_

9. \_\_\_\_\_

10. \_\_\_\_\_

11. \_\_\_\_\_

12. \_\_\_\_\_

13. \_\_\_\_\_

14. \_\_\_\_\_

15. \_\_\_\_\_

16. \_\_\_\_\_

17. \_\_\_\_\_

18. \_\_\_\_\_

19. \_\_\_\_\_

20. \_\_\_\_\_

Ex)  $\frac{5}{10} = 0.5$

1)  $\frac{9}{10} =$

2)  $\frac{8}{10} =$

3)  $\frac{15}{100} =$

4)  $\frac{7}{100} =$

5)  $\frac{92}{100} =$

6)  $\frac{2}{100} =$

7)  $\frac{51}{100} =$

8)  $\frac{2}{10} =$

9)  $\frac{9}{100} =$

10)  $\frac{1}{10} =$

11)  $\frac{3}{100} =$

12)  $\frac{7}{10} =$

13)  $\frac{6}{10} =$

14)  $\frac{5}{100} =$

15)  $\frac{4}{100} =$

16)  $\frac{29}{100} =$

17)  $\frac{31}{100} =$

18)  $\frac{35}{100} =$


19)  $\frac{1}{100} =$

20)  $\frac{53}{100} =$



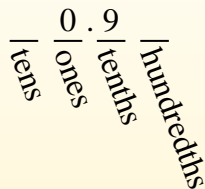
**Convert the fraction to a decimal.**

Converting from a fraction to a decimal is simple as long as you remember the place values.



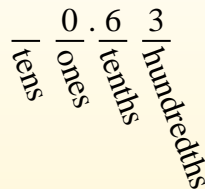
$$\frac{9}{10}$$

The example above is nine-tenths. Lets look at how we'd write that as a decimal.



$$\frac{63}{100}$$

We do the same thing for the problem above only make sure we're in the hundredths place.



**Answers**

- Ex. 0.5
- 1. 0.9
- 2. 0.8
- 3. 0.15
- 4. 0.07
- 5. 0.92
- 6. 0.02
- 7. 0.51
- 8. 0.2
- 9. 0.09
- 10. 0.1
- 11. 0.03
- 12. 0.7
- 13. 0.6
- 14. 0.05
- 15. 0.04
- 16. 0.29
- 17. 0.31
- 18. 0.35
- 19. 0.01
- 20. 0.53

Ex)  $\frac{5}{10} = 0.5$

1)  $\frac{9}{10} = 0.9$

2)  $\frac{8}{10} = 0.8$

3)  $\frac{15}{100} = 0.15$

4)  $\frac{7}{100} = 0.07$

5)  $\frac{92}{100} = 0.92$

6)  $\frac{2}{100} = 0.02$

7)  $\frac{51}{100} = 0.51$

8)  $\frac{2}{10} = 0.2$

9)  $\frac{9}{100} = 0.09$

10)  $\frac{1}{10} = 0.1$

11)  $\frac{3}{100} = 0.03$

12)  $\frac{7}{10} = 0.7$

13)  $\frac{6}{10} = 0.6$

14)  $\frac{5}{100} = 0.05$

15)  $\frac{4}{100} = 0.04$

16)  $\frac{29}{100} = 0.29$

17)  $\frac{31}{100} = 0.31$

18)  $\frac{35}{100} = 0.35$

19)  $\frac{1}{100} = 0.01$

20)  $\frac{53}{100} = 0.53$